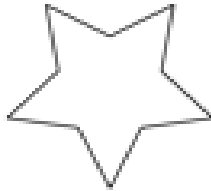
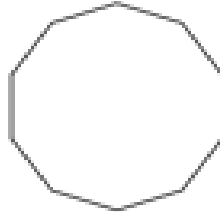


1. Escribe en el margen de la derecha si son polígonos regulares o irregulares.

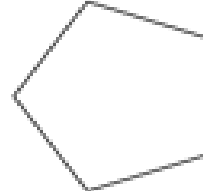
1)



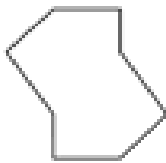
2)



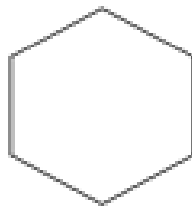
3)



4)



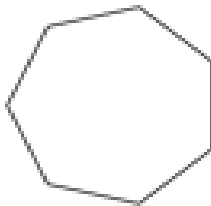
5)



6)



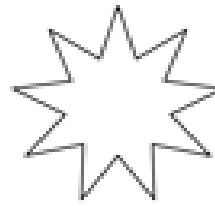
7)



8)



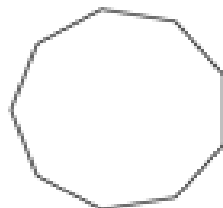
9)



10)




11)



12)



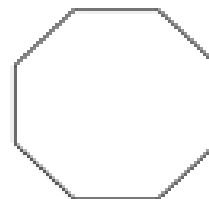
13)



14)



15)



1. _____
2. _____
3. _____
4. _____
5. _____
6. _____
7. _____
8. _____
9. _____
10. _____
11. _____
12. _____
13. _____
14. _____
15. _____

2. A continuación, clasifica los polígonos anteriores según el número de sus lados.

Ejemplo:

1. Decágono

2. _____

3. _____

4. _____

5. _____

6. _____

7. _____

8. _____

9. _____

10. _____

11. _____

12. _____

13. _____

14. _____

15. _____